

A Puzzling Outcome

5th
Grade

	X		-	9	-6
+		-		X	
	-		+	5	0
X		-		+	
	-		+	8	10
15		-10		53	

Table of Contents

A Puzzling Outcome

Missing Number Puzzles #1
Missing Number Puzzles #2
Missing Number Puzzles #3
Missing Number Puzzles #4
Missing Number Puzzles #5
Missing Number Puzzles #6
Missing Number Puzzles #7
Missing Number Puzzles #8
Missing Number Puzzles #9
Missing Number Puzzles #10
Missing Number Puzzles #11
Missing Number Puzzles #12
Missing Number Puzzles #13
Baseball Diamond Puzzles #1 *
Baseball Diamond Puzzles #2 *
Baseball Diamond Puzzles #3 *
Baseball Diamond Puzzles #4 *
Baseball Diamond Puzzles #5 *

Certificate of Completion
Answer Sheets

** Has an Answer Sheet*

Want more workbooks? Join [Education.com Plus](http://www.education.com/education-plus/) to save time and money.
<http://www.education.com/education-plus/>

Missing Number Puzzles

These puzzles are tricky!

Use 1 through 4 to finish each equation. Use each number only once.

Each column is a math equation. Each row is a math equation.

HINT: Multiply BEFORE you add and subtract!

1.

	X		12
+		+	
	-		-1
5		5	

2.

	X		8
X		-	
	+		4
2		1	

3.

	+		5
X		-	
	-		1
12		-1	

4.

	X		8
+		-	
	-		-2
3		1	

Answers

1.

	5		5
-1	2	-	1
	+		+
12	3	X	4

2.

	1		2
4	3	+	1
	-		X
8	4	X	2

3.

	-1		12
1	2	-	3
	-		X
5	1	+	4

4.

	1		3
-2	3	-	1
	-		+
8	4	X	2

Missing Number Puzzles

These puzzles are tricky!

Use 1 through 4 to finish each equation. Use each number only once.

Each column is a math equation. Each row is a math equation.

HINT: Multiply BEFORE you add and subtract!

1.

	-		3
+		X	
	-		1
7		2	

2.

	+		4
X		+	
	X		8
2		7	

3.

	X		8
X		-	
	-		2
6		3	

4.

	-		-1
-		X	
	+		5
-2		3	

Answers

1.

	2		7
1	2	-	3
	X		+
3	1	-	4

2.

	7		2
8	4	X	2
	+		X
4	3	+	1

3.

	3		6
2	1	-	3
	-		X
8	4	X	2

4.

	3		-2
5	1	+	4
	X		-
-1	3	-	2

Missing Number Puzzles

These puzzles are tricky!

Use 1 through 4 to finish each equation. Use each number only once.

Each column is a math equation. Each row is a math equation.

HINT: Multiply BEFORE you add and subtract!

1.

	+		4
+		-	
	X		8
5		-3	

2.

	X		6
X		+	
	-		-3
2		7	

3.

	X		6
X		X	
	-		3
8		3	

4.

	+		6
-		X	
	X		3
-1		4	

Answers

1.

		-3	5	
8	4	X	2	
		-		+
4	1	+	3	

2.

		7	2	
-3	4	-	1	
		+		X
6	3	X	2	

3.

		3	8	
3	1	-	4	
		X		X
6	3	X	2	

4.

		4	-1	
3	1	X	3	
		X		-
6	4	+	2	

Missing Number Puzzles

These puzzles are tricky!

Use 1 through 9 to finish each equation. Use each number only once.

Each column is a math equation. Each row is a math equation.

HINT: Multiply and divide BEFORE you add and subtract!

1.

9	+		+		17
+		X		+	
	X		-		14
X		-		/	
	-		-		3
41		32		4	

2.

	-		+		3
-		X		+	
	X		+		31
/		-		X	
	X		+	7	13
1		42		15	

3.

	+		X		53
/		/		+	
	X	3	+		12
+		+		X	
	-		X		3
11		4		29	

4.

	+		+	9	16
-		+		X	
	X		+		43
X		X		/	
	X		+		10
-15		11		18	

Answers

1.

4	32	41			
8	-	3	-	8	2
	X		-	X	/
4	X	5	-	6	14
	+		X		+
9	+	7	+	1	17

2.

15	42	1			
13	7	3	+	2	X
	X		-		/
31	1	6	+	5	X
	+		X		-
3	8	4	-	9	+

3.

29	4	11			
3	4	7	-	1	X
	X		+		+
12	6	2	X	3	+
	+		/		/
53	5	8	+	9	X

4.

18	11	-15			
10	4	3	+	2	X
	/		X		X
43	8	7	+	5	X
	X		+		-
16	9	6	+	1	+

Missing Number Puzzles

These puzzles are tricky!

Use 1 through 9 to finish each equation. Use each number only once.

Each column is a math equation. Each row is a math equation.

HINT: Multiply and divide BEFORE you add and subtract!

1.

1	+		-		6
-		X		-	
	-		X		-6
+		+		X	
	+		-		2
-4		41		-22	

2.

	-		-	3	4
+		+		+	
	+		+		12
X		+		-	
	/		-		-5
57		7		1	

3.

	X		+		14
-		-		+	
	X		-		-3
/		X		X	
	X		+	7	31
0		-3		67	

4.

	-		+		4
X		X		X	
	X		+	9	11
-		+		+	
	+		+		15
-3		17		58	

Answers

1.

2.

3.

4.

Missing Number Puzzles

These puzzles are tricky!

Use 1 through 9 to finish each equation. Use each number only once.

Each column is a math equation. Each row is a math equation.

HINT: Multiply and divide BEFORE you add and subtract!

1.

	X		-		3
X		+		+	
	-	8	-		-7
/		+		X	
	-		-		-8
14	18	14			

2.

	X		-		-2
X		X		X	
	+		-		2
+		-		+	
	-		-	2	-4
27	2	74			

3.

1	-		-		-15
X		+		X	
	+		+		17
-		+		-	
	-		+		5
3	16	50			

4.

	X		+		46
X		X		-	
4	/		+		10
+		-		X	
	X		/		14
27	12	-23			

Answers

1.

14	18	14			
-8	2	-	9	-	3
X		+		/	
-7	5	-	8	-	6
	+		+		X
3	4	-	1	X	7

2.

74	2	27			
-4	2	-	5	-	3
	+		-		+
2	9	-	7	+	4
	X		X		X
-2	8	-	1	X	6

3.

50	16	3			
5	6	+	3	-	2
			+		-
17	8	+	4	+	5
	X		+		X
-15	7	-	9	-	1

4.

-23	12	27			
14	3	/	6	X	7
	X		-		+
10	8	+	2	/	4
	-		X		X
46	1	+	9	X	5

Missing Number Puzzles

These puzzles are tricky!

Use 1 through 9 to finish each equation. Use each number only once.

Each column is a math equation. Each row is a math equation.

HINT: Multiply and divide BEFORE you add and subtract!

1.

	-		X	8	-25
+		+		-	
	+		+		13
-		-		+	
	X		/		15
11		-1		7	

2.

	-		X		-4
-		-		X	
	/		-		0
-		X		+	
	+		-	6	8
-10		-17		34	

3.

	-		+		10
X		-		-	
	X		+		55
+		+		X	
1	X		-		1
25		1		-19	

4.

	/		X	5	15
X		+		+	
	+		-		-1
-		-		+	
	X		-		41
12		-4		16	

Answers

1.

2.

3.

4.

Missing Number Puzzles

These puzzles are tricky!

Use 1 through 9 to finish each equation. Use each number only once.

Each column is a math equation. Each row is a math equation.

HINT: Multiply and divide BEFORE you add and subtract!

1.

	+		X		44
+		+		+	
	+		X	3	27
/		-		-	
	+		+		8
11		11		6	

2.

	X		-		22
+		+		X	
	X		-		-6
+		+		/	
	+		+	4	17
12		16		10	

3.

	-		/	4	3
+		-		X	
	X		-		5
X		+		-	
	-		-		-4
11		7		35	

4.

	-		+		9
/		+		+	
	X		+		14
X		X		X	
	-	5	-		-13
3		19		79	

Answers

1.

					6
8		1	+	5	11
			+	9	11
27		-	/	7	3
			+	7	3
			+	9	4
44			X	9	4

2.

					10
17		4	+	6	16
			+	8	12
-6		/		1	8
			X	8	-6
			+	9	5
22			X	9	5

3.

					35
-4		1	-	6	7
			+	7	11
			X	7	5
			-	7	5
			+	8	11
			X	8	35

4.

					79
-13		9	-	5	19
			X	3	3
			+	8	14
			+	8	14
			+	4	9
			-	4	7

Missing Number Puzzles

These puzzles are tricky!

Use 1 through 9 to finish each equation. Use each number only once.

Each column is a math equation. Each row is a math equation.

HINT: Multiply and divide BEFORE you add and subtract!

1.

	X		-		39
+		+		+	
	X		+	4	39
X		X		/	
	-		X		-5
13		27		11	

2.

	-		X		-1
X		+		+	
	+		+		21
+		+		X	
	/		-	6	-4
22		10		57	

3.

	+		-		3
+		X		X	
8	/		/		1
-		-		-	
	/		X		2
9		17		17	

4.

	-		-		4
X		-		X	
	-		-		-6
+		X		+	
6	/		X		15
62		-17		17	

Answers

1.

					11					27					13
-5															

2.

3.

4.

Missing Number Puzzles

These puzzles are tricky!

Use 1 through 9 to finish each equation. Use each number only once.

Each column is a math equation. Each row is a math equation.

HINT: Multiply and divide BEFORE you add and subtract!

1.

	-		-		-13
+		-		/	
	x	4	+		31
+		-		+	
	-		+		4
17		0		3	

2.

8	/		-		3
+		-		+	
	-		+		2
+		-		+	
	-		x		-31
16		-9		16	

3.

	+		-		3
x		+		-	
5	-		+		8
+		+		-	
	/		+		3
51		9		0	

4.

	/		x		10
-		-		+	
	-		/	3	6
x		-		-	
	-		+		3
-4		-11		-1	

Answers

1.

3		0		17	
4	1	+	5	-	8
	+		-		+
31	3	+	4	x	7
	/		-		+
-13	6	-	9	-	2

2.

16		-9		16	
-31	9	x	4	-	5
	+		-		+
2	6	+	7	-	3
	+		-		+
3	1	-	2	/	8

3.

0		9		51	
3	1	+	3	/	6
	-		+		+
8	7	+	4	-	5
	-		+		x
3	8	-	2	+	9

4.

-1		-11		-4	
3	9	+	7	-	1
	-		-		x
6	3	/	6	-	8
	+		-		-
10	5	x	2	/	4

Missing Number Puzzles

These puzzles are tricky!

Use 1 through 9 to finish each equation. Use each number only once.

Each column is a math equation. Each row is a math equation.

HINT: Multiply and divide BEFORE you add and subtract!

1.

	+		X		39
-		+		X	
	+		X		25
-		+		-	
	-	2	X		-15
4		15		7	

2.

	-		-		-6
+		/		-	
1	X		+		10
-		/		-	
	X		-		5
-1		1		-12	

3.

9	X		/		27
+		-		+	
	X		+		12
X		+		+	
	X		+		26
21		12		15	

4.

	/		+		7
/		X		X	
	X	7	+		20
X		+		-	
	+		X		12
12		29		21	

Answers

1.

					7
		15		4	
-15	8	X	2	-	1
			+		-
25	3	X	7	+	4
		X		+	-
39	5	X	6	+	9

2.

					-12
		1		-1	
5	9	-	2	X	7
			/		-
10	6	+	4	X	1
			/		+
-6	3	-	8	-	5

3.

					15
		12		21	
26	5	+	7	X	3
			+		X
12	8	+	1	X	4
			-		+
27	2	/	6	X	9

4.

					12
		29		12	
12	9	X	1	+	3
			+		X
20	6	+	7	X	2
		X		X	/
7	5	+	4	/	8

Missing Number Puzzles

These puzzles are tricky!

Use 1 through 9 to finish each equation. Use each number only once.

Each column is a math equation. Each row is a math equation.

HINT: Multiply and divide BEFORE you add and subtract!

1.

	+		+		18
-		X		-	
	-		X		5
-		-		/	
	+		/	2	8
-11		2		5	

2.

	X		+		35
-		-		+	
	/	2	+		3
-		-		-	
	X		+		47
-7		0		4	

3.

	-		-		3
+		-		X	
	+		-		1
X		X		-	
4	-		-		-13
27		-15		-2	

4.

	+	7	+		17
+		X		/	
	X		+		11
X		+		X	
	-		X		-13
44		9		18	

Answers

1.

5	2	-11			
8	2	/	6	+	5
		/		-	-
5			9	-	1
			X		4
			-		
			X		
			3	+	8
			7	+	18

2.

4	0	-7			
47			6	X	7
			-		-
			4	/	2
			3	+	1
				+	
			3	X	9
			8	+	35

3.

-2	-15	27			
-13			4	-	9
			-		-
			X		X
			5	+	2
			1	-	6
				+	X
			7	-	3
			1	-	3

4.

18	9	44			
-13			5	-	2
			X		X
				+	
			8	X	1
			11	+	3
				/	X
			6	+	7
			17	+	4

Missing Number Puzzles

These puzzles are tricky!

Use 1 through 9 to finish each equation. Use each number only once.

Each column is a math equation. Each row is a math equation.

HINT: Multiply and divide BEFORE you add and subtract!

1.

	X		+		27
-		+		+	
8	-		+		1
+		+		X	
	+		X		36
-1		20		13	

2.

	X		-	9	-6
+		-		X	
	-		+		0
X		-		+	
	-		+		10
15		-10		53	

3.

	X		-		23
-		/		X	
	X		+	9	21
/		+		-	
	-		-		-7
3		3		55	

4.

	X		-		9
+		+		-	
	+		-		6
-		/		X	
	+		X	1	6
8		7		-3	

Answers

1.

					13	20	-1
96	5	X	7	+	1		
	X		+				
1	2	+	9	-	8		
	+		+		-		
27	3	+	4	X	6		

2.

					53	-10	15
10	8	+	4	-	6		
	+		-		X		
0	5	+	7	-	2		
	X		-		+		
-6	9	-	1	X	3		

3.

					55	3	3
-7	8	-	1	-	2		
	-		+		/		
21	9	+	3	X	4		
	X		/		-		
23	7	-	6	X	5		

4.

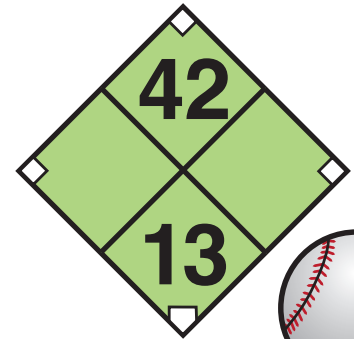
					-3	7	8
9	1	X	4	+	2		
	X		/		-		
9	9	-	8	+	7		
	-		+		+		
9	6	-	5	X	3		



BASEBALL DIAMOND PUZZLES

Solve the puzzles by finding two numbers whose product equals the top number, and whose sum equals the bottom number.

ex:

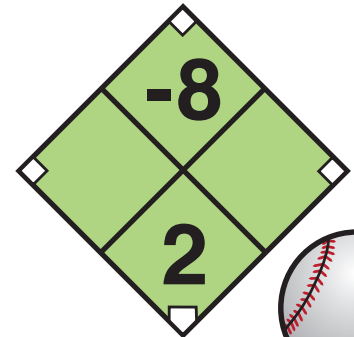
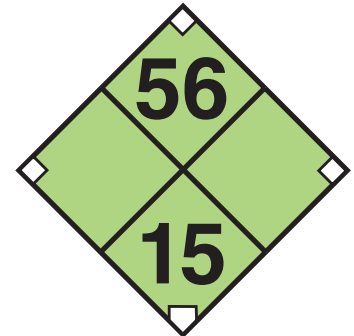




BASEBALL DIAMOND PUZZLES

Solve the puzzles by finding two numbers whose product equals the top number, and whose sum equals the bottom number.

ex:

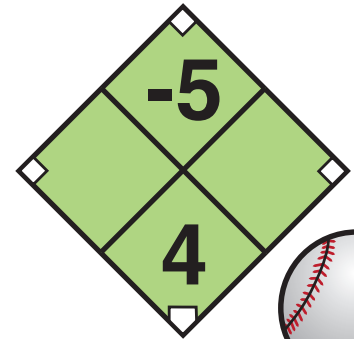
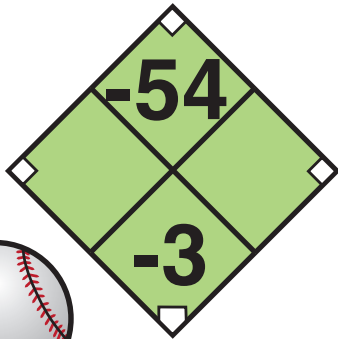




BASEBALL DIAMOND PUZZLES

Solve the puzzles by finding two numbers whose product equals the top number, and whose sum equals the bottom number.

ex:

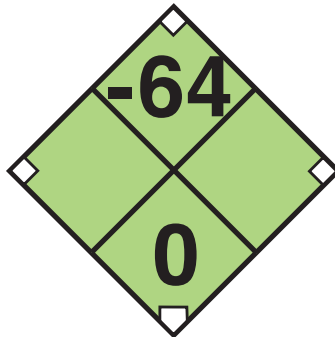
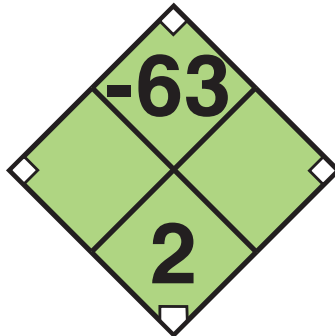




BASEBALL DIAMOND PUZZLES

Solve the puzzles by finding two numbers whose product equals the top number, and whose sum equals the bottom number.

ex:

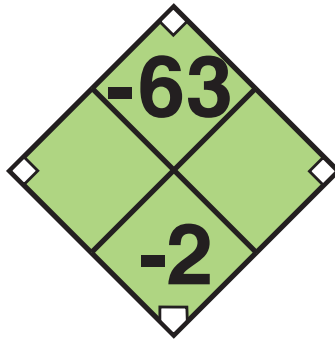




BASEBALL DIAMOND PUZZLES


Solve the puzzles by finding two numbers whose product equals the top number, and whose sum equals the bottom number.

ex:



Great job!

is an Education.com math superstar



Answer Sheets

A Puzzling Outcome

Baseball Diamond Puzzles #1
Baseball Diamond Puzzles #2
Baseball Diamond Puzzles #3
Baseball Diamond Puzzles #4
Baseball Diamond Puzzles #5

Want more workbooks? Join Education.com Plus to save time and money.
<http://www.education.com/education-plus/>

Answer Sheet

BASEBALL DIAMOND PUZZLES

Solve the puzzles by finding two numbers whose product equals the top number, and whose sum equals the bottom number.

ex:



Answer Sheet

BASEBALL DIAMOND PUZZLES

Solve the puzzles by finding two numbers whose product equals the top number, and whose sum equals the bottom number.

ex:



Answer Sheet

BASEBALL DIAMOND PUZZLES

Solve the puzzles by finding two numbers whose product equals the top number, and whose sum equals the bottom number.

ex:



Answer Sheet

BASEBALL DIAMOND PUZZLES

Solve the puzzles by finding two numbers whose product equals the top number, and whose sum equals the bottom number.

ex:



Answer Sheet

BASEBALL DIAMOND PUZZLES

Solve the puzzles by finding two numbers whose product equals the top number, and whose sum equals the bottom number.

ex:

