

Question 1: A wall clock has two hands namely the hour hand, and the minute hand. It is 15 past 12 now; the angle formed by the hour hand and the minute hand is _____.

- A. an obtuse angle (một góc tù) B. a right angle (một góc vuông)
C. an acute angle (một góc nhọn) D. a straight angle (một góc bẹt)

Question 2: Read this poem and answer the question below it.

Che chung

(Phúc Giang)

Ếch kêu ồm ộp
Trời sắp mưa rồi, Gà con mê chơi
Lộp đà lộp độp Quên đi tìm ổ, Gà im một chỗ
Tìm chỗ trú thôi. Mưa rơi mưa rơi Mưa ướt hết lông,
Mọi người về tổ. Ếch chìa lá súng
"Hai mình che chung!"

Which of the following words / phrases describes sound made by the rain?

- A. ồm ộp B. mưa rơi C. lộp độp D. mưa rồi

Question 3: The city we live in was officially named Ho Chi Minh City in _____.

- A. 1975 B. 1976 C. 1945 D. 1954

Question 4: Which of the following Vietnamese proverbs is the proverb "The grass is always greener on the other side of the fence." synonymous to?

- A. Chớ thấy sóng cả mà ngã tay chèo. B. Chớ củi về rừng.
C. Đứng núi này trông núi nọ. D. Xanh vỏ đỏ lòng.

Question 5: Each sign ●, ▲, ♥ shows a certain natural number with the total vertically or horizontally as shown in the side picture. The value of the sign "?" in the picture is _____.

- A. 17 B. 23
C. 16 D. 18

●	▲	♥	?
●	▲	▲	13
♥	♥	●	21
15	19	?	

Question 6: Lan wants to buy a doll from a shop. The shop has just displayed the doll and it has only one doll. The doll is priced 100 000 đồng. However, Lan has saved only 70 000 đồng. After every month, if no one has bought the doll, the price of the doll will be reduced by 10% compared with its price the previous month. If no one has bought the doll, how many months at least will Lan have to wait to buy the doll with the money she has saved?

- A. 3 months B. 4 months C. 5 months D. 2 months

Question 7: During summer break, a group of 5 students are participating in tidying and decorating a park near their houses. They have planned to finish the work in 7 days. However, after 4 days, two students have to stop work to take part in a local sporting competition. Supposing that all the students have the same efficiency in their work, how many days will the rest of the students have to spend completing the work of the whole group?

- A. 5 days B. 4 days C. 6 days D. 7 days

Question 8: Which of the following is NOT a factor that partly prevents our body suffering from constipation (táo bón)?

- A. Eating enough vegetables B. Drinking enough water
C. Eating enough meat, and fish D. Doing regular exercise

Question 9: Which of the following statements is WRONG?

Riding a motorbike, and driving a car on the pavement are actions that _____.

- A. cause dangers to pedestrians on the pavement
B. lack civic awareness (ý thức công dân)
C. violate the traffic regulations and are fined
D. are allowed when the street is crowded with traffic

Question 10: There is one city in our country, formerly called “Hòn ngọc Viễn Đông”, and that is _____.

- A. Hà Nội
- B. Thành phố Hồ Chí Minh
- C. Huế
- D. Đà Nẵng

Question 11: Trần Đại Nghĩa (1913-1997), whose real name was Phạm Quang Lễ, born in Vinh Long province, contributed a great deal to the revolutionary cause of Viet Nam, mainly in the field of _____.

- A. education
- B. economy
- C. military
- D. culture

Question 12: A shop has an old bill selling some books. The number of books sold is 90. The total amount of money from the books sold is a number of six digits, but the two outer-most digits blur (*mờ*); only four digits in between are readable: ■8895■ đồng. The price of each book is the same but also completely blurs. Which of the following statements is RIGHT?

The price of each book is an amount _____.

- A. between 8000 đồng and 9000 đồng
- B. between 7000 đồng and 8000 đồng
- C. between 6000 đồng and 7000 đồng
- D. between 5000 đồng and 6000 đồng

Question 13: The World Health Organization has suggested that nations in the world should not use thermometers containing mercury (*thủy ngân*) (side picture), but use other kinds of thermometers instead, to measure body temperature, because _____.

A. the mercury thermometer does not produce accurate results

B. when the thermometer is broken, the broken glass pieces may injure people

C. it is hard to see the numbers shown on a mercury thermometer

D. mercury is a highly harmful substance to humans and other creatures if it is released (*thoát ra*) from a broken thermometer



Question 14: In order to avoid bad effects on our health, which of the following habits should we keep?

A. Eating one's fill (*ăn thật no*) before doing exercise to fill the body with enough energy.

B. Limiting drinking water to make the digestion, and excretion systems (*hệ tiêu hoá, bài tiết*) of the body not work too hard.

C. Completely avoiding exposure to sunlight in order not to do harm to the skin.

D. Regularly having adequate breakfast.

Question 15: Read the information. Choose the correct answer to the question.

Information in the Thanh Nien newspaper issued on April 10, 2017:

Nguyễn Văn Chung là con út trong một gia đình có 6 anh chị em tại một vùng quê ở Hà Nội. Năm Chung học lớp 9, một tai nạn khiến Chung bị đứt mắt cả đôi chân.

Quyết không trở thành người vô dụng, Chung đã tập cách đi chuyển bằng đôi tay. Sau đó, Chung lại tiếp tục học bơi, trở thành một vận động viên bơi lội giỏi và đạt được nhiều huy chương vàng, bạc, đồng trong các cuộc thi.

Không dừng lại ở đó, chàng vận động viên này đã dấn thân vào con đường kinh doanh, chọn tiêu chí sạch, an toàn cho sức khỏe và thân thiện với môi trường làm định hướng khởi nghiệp. Từ đó, Chung đã cho ra đời sản phẩm xà bông làm từ nhiều vật liệu tự nhiên như dầu dừa, mật ong, bột nghệ, tinh dầu...

Chung tâm niệm rằng anh muốn kinh doanh để kiếm tiền lo cho mẹ. Nhưng kinh doanh không phải là chỉ nghĩ đến đồng tiền bỏ vào túi. Mình phải nghĩ đến chuyện làm một việc gì đó vừa có thu nhập cho bản thân vừa có thể giúp ích xã hội...

Hiện tại sản phẩm của Chung đã có mặt ở Hà Nội, TP. Hồ Chí Minh và được nhiều khách hàng tin dùng.

Which of the following points of view does the above-mentioned content NOT express?

A. Sống có ích cho bản thân, gia đình và xã hội.

B. Sống giản dị, tiết kiệm.

C. Có ý thức bảo vệ môi trường, trân trọng sức khỏe của mọi người xung quanh.

D. Có ý chí, nghị lực vươn lên trong cuộc sống.

Question 16:

*Lên non mới biết non cao,
Nuôi con mới biết công lao mẹ hiền.*

The word “non” in the poem is synonymous to the word “non” in:

<p>A. <i>Bấp non mà nướng lửa lò, Đó ai còn thấy con đồ Thủ Thiêm.</i></p>	<p>B. <i>Con cò lặn lội bờ sông, Gánh gạo đưa chồng, tiếng khóc nỉ non.</i></p>
<p>C. <i>Cổ thụ là bóng mẹ cha, Cây non là cả vườn hoa tuổi hồng.</i></p>	<p>D. <i>Em ơi chua ngọt đã từng, Non xanh, nước bạc, ta đừng quên nhau.</i></p>

Question 17: Fresh water (drinking water and running water (*nước sinh hoạt*)) through water pipes supplying households in Ho Chi Minh city is mostly taken from _____.

- A. The Dong Nai river and the Tien river
- B. The Saigon river and the Hau river
- C. The Saigon river and the Dong Nai river
- D. The Saigon river and the Tien river

Question 18: The same segments (*đoạn thẳng*) are arranged to form the number 6805 as in the side picture. When moving only two segments, we will have a new four-digit number. The highest possible value of that new number is _____.

6805

- A. between 9981 and 9988
- B. between 9989 and 9999
- C. between 9901 and 9980
- D. between 9884 and 9900

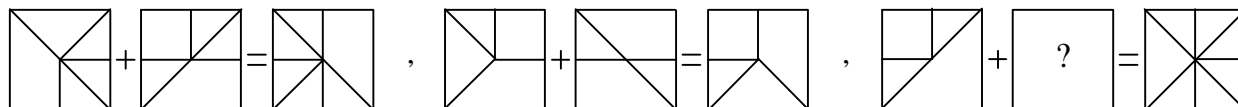
Question 19: In more than 1000 years, our country continuously fought against Northern invaders. The first uprising of our people against those invaders was that of _____.

- A. Khúc Thừa Dụ
- B. Phùng Hưng
- C. Bà Triệu
- D. Hai Bà Trưng

Question 20: In more than 1000 years, our country continuously fought against Northern invaders. The hero leading our struggle against those invaders, winning back independence for our country, forever ending the Northern invasions was _____.

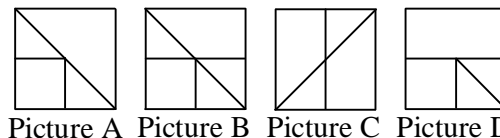
- A. Ngô Quyền
- B. Dương Đình Nghệ
- C. Lê Đại Hành
- D. Đinh Bộ Lĩnh

Question 21: There is a rule for the following pictures.




We have to replace the picture having “?” with which picture A, B, C, or D?

- A. Picture A
- B. Picture B
- C. Picture C
- D. Picture D



Question 22: Which picture 2, 3, 4, or 5 is identical to picture 1?



- A. Picture 2
- B. Picture 3
- C. Picture 4
- D. Picture 5

Question 23: A normal person has an average heart rate of 70 beats per minute. Each beat pumps an average of 70 ml of blood through the heart. The total volume of blood pumped through the heart per day is closest to _____.

- A. 700 l
- B. 70000 l
- C. 70 l
- D. 7000 l

Question 24: A shop sells bottled drinking water priced 3000 đồng/bottle. The shop has a promotion program (*chương trình khuyến mãi*) offering 1 bottle free for every 5 bottles bought. A teacher is planning a field trip for a class of 34 students, and needs to buy each student one bottle of water. The amount of money the teacher has to pay is _____.

- A. 87 000 đồng B. 84 000 đồng C. 90 000 đồng D. 81 000 đồng

----- THE END -----

ĐÁP ÁN (mỗi câu 2,5đ)

- | | | |
|------|-------|-------|
| 1. C | 9. D | 17. C |
| 2. C | 10. B | 18. A |
| 3. B | 11. C | 19. D |
| 4. C | 12. B | 20. A |
| 5. A | 13. D | 21. B |
| 6. B | 14. D | 22. A |
| 7. A | 15. B | 23. D |
| 8. C | 16. D | 24. A |