


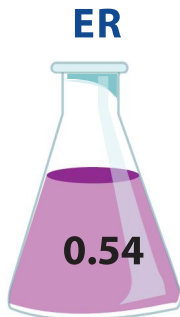



Answer Sheet

ANSWER SHEET

4th
Grade

Beaker Puzzle: Practice Ordering Decimals

Order the decimal numbers on the beakers from largest to smallest, then use the letters to answer the question below.



E **X** **P** **ER** **I** **M** **EN** **T**

1.10 1.01 1.0 0.54 0.504 0.44 0.405 0.145

What do scientists do?
EXPERIMENT

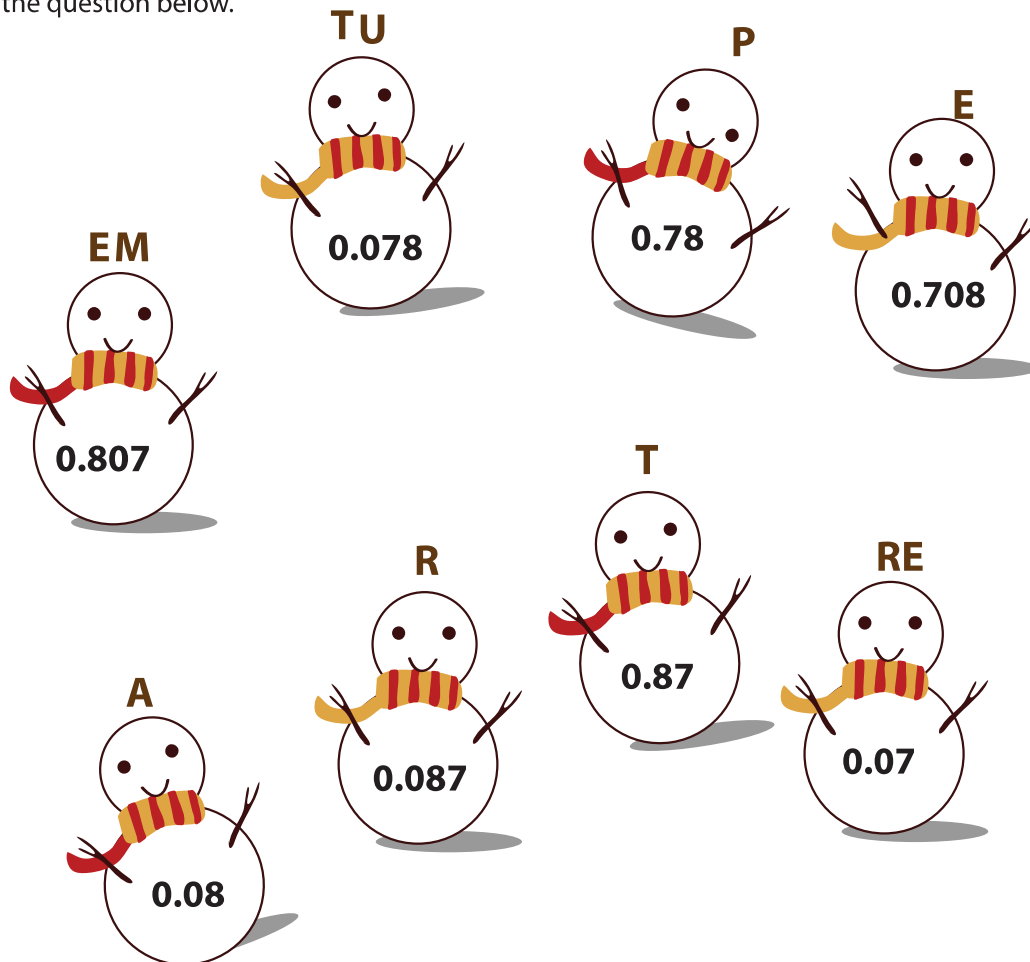
Answer Sheet

4th
Grade

ANSWER SHEET

Snowman Puzzle: Practice Ordering Decimals

Order the decimal numbers on the snowmen from largest to smallest, then use the letters to answer the question below.



T **EM** **P** **E** **R** **A** **TU** **RE**
0.87 **0.807** **0.78** **0.708** **0.087** **0.08** **0.078** **0.07**

What is very important for snowmen?

TEMPERATURE

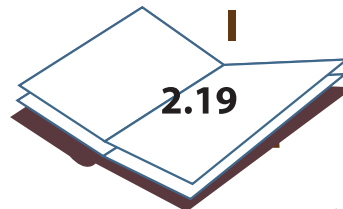
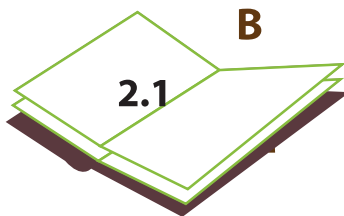
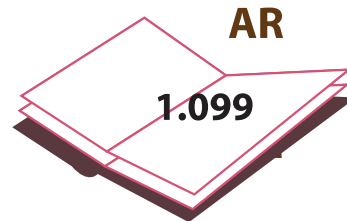
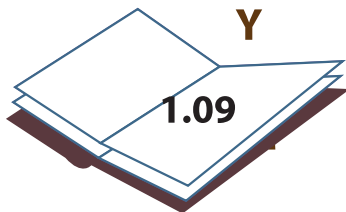
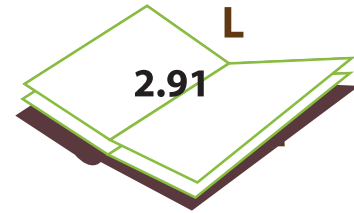
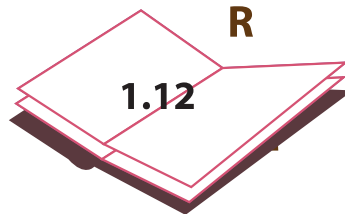
Answer Sheet

4th
Grade

ANSWER SHEET

Book Puzzle: Practice Ordering Decimals

Order the decimal numbers on the books from largest to smallest, then use the letters to answer the question below.



L **I** **B** **R** **AR** **Y**
2.91 **2.19** **2.1** **1.12** **1.099** **1.09**

What is the place that houses books?

LIBRARY

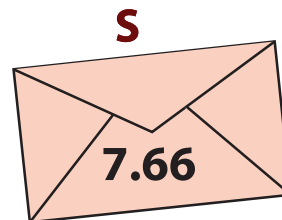
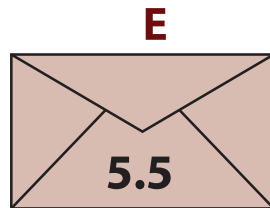
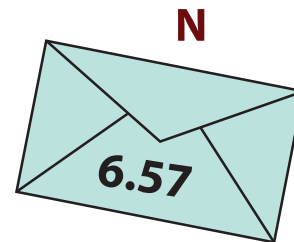
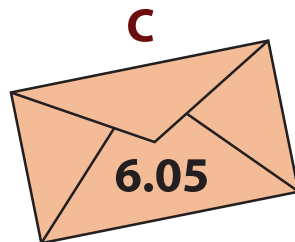
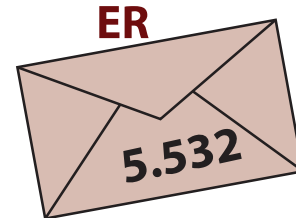
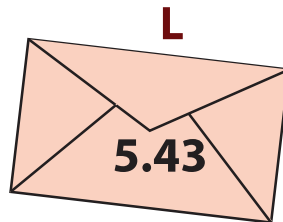


Answer Sheet

ANSWER SHEET

4th
Grade

Envelope Puzzle: Practice Ordering Decimals

Order the decimal numbers on the envelopes from largest to smallest, then use the letters to answer the question below.



S I N C ER E L Y
7.66 7.574 6.57 6.05 5.532 5.5 5.43 5.423

What word do you use to end a letter?

SINCERELY


Answer Sheet

ANSWER SHEET

4th
Grade

Soup Can Puzzle: Practice Ordering Decimals

Order the decimal numbers on the soup cans from largest to smallest, then use the letters to answer the question below.



F A C T O R Y

3.55 3.535 3.355 3.353 3.335 3.053 3.035

Where do soup cans come from?

FACTORY

Answer Sheet

ANSWER SHEET

4th
Grade

Flower Puzzle: Practice Ordering Decimals

Order the decimal numbers on the flower pots from largest to smallest, then use the letters to answer the question below.

T
0.011

U
0.1

E
0.110

F
0.001

UL
0

A
0.101

B
1

I
0.01

B E A U T I F U L
1 0.110 0.101 0.1 0.011 0.01 0.001 0

What word describes these flowers?

BEAUTIFUL


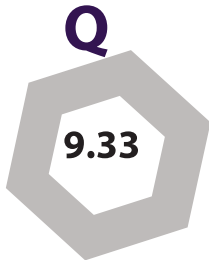
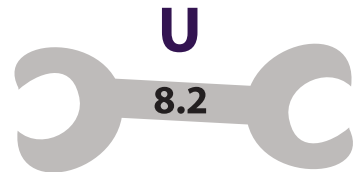
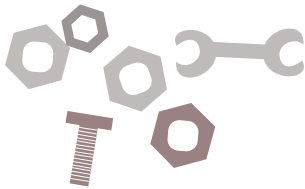
Answer Sheet

ANSWER SHEET

4th
Grade

Nuts and Bolts: Practice Ordering Decimals

Order the decimal numbers on the nuts and bolts from largest to smallest, then use the letters to answer the question below.



E Q U I P M E N T

9.402 9.33 8.2 8.195 7.4 7.201 6.60 6.091

A mechanic always has his EQUIPMENT on hand.

Answer Sheet

ANSWER SHEET

4th
Grade

Conversation: Practice Ordering Decimals

Order the decimal numbers on the conversation bubbles from largest to smallest, then use the letters to answer the question below.



R

9.09219

E

9.35

DE

7.09345

S

8.49461

U

8.03912

P

10.0001

A

7.201

P

E

R

S

U

A

DE

10.0001

9.35

9.09219

8.49461

8.03912

7.201

7.09345

Jacob is trying to PERSUADE Jack.



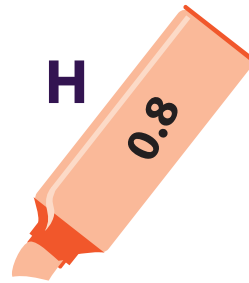
Answer Sheet

ANSWER SHEET

4th
Grade

Marker Puzzle: Practice Ordering Decimals

Order the decimal numbers on the markers from largest to smallest, then use the letters to answer the question below.



E

M

P

H

A

S

I

ZE

0.973

0.96

0.89

0.8

0.78

0.72

0.68

0.264

What do markers help us do?

EMPHASIZE



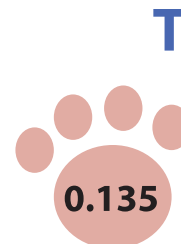

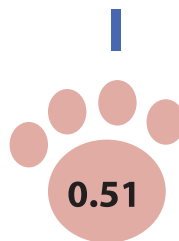
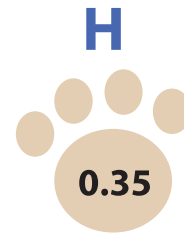

Answer Sheet

4th
Grade

ANSWER SHEET

Paw Prints Puzzle: Practice Ordering Decimals

Order the decimal numbers on the paw prints from largest to smallest, then use the letters to answer the question below.



F

R

I

G

H

T

E

N

ED

0.736

0.673

0.51

0.47

0.35

0.135

0.12

0.092

0.09

This puppy is FRIGHTENED.