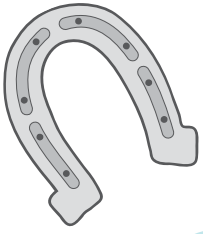
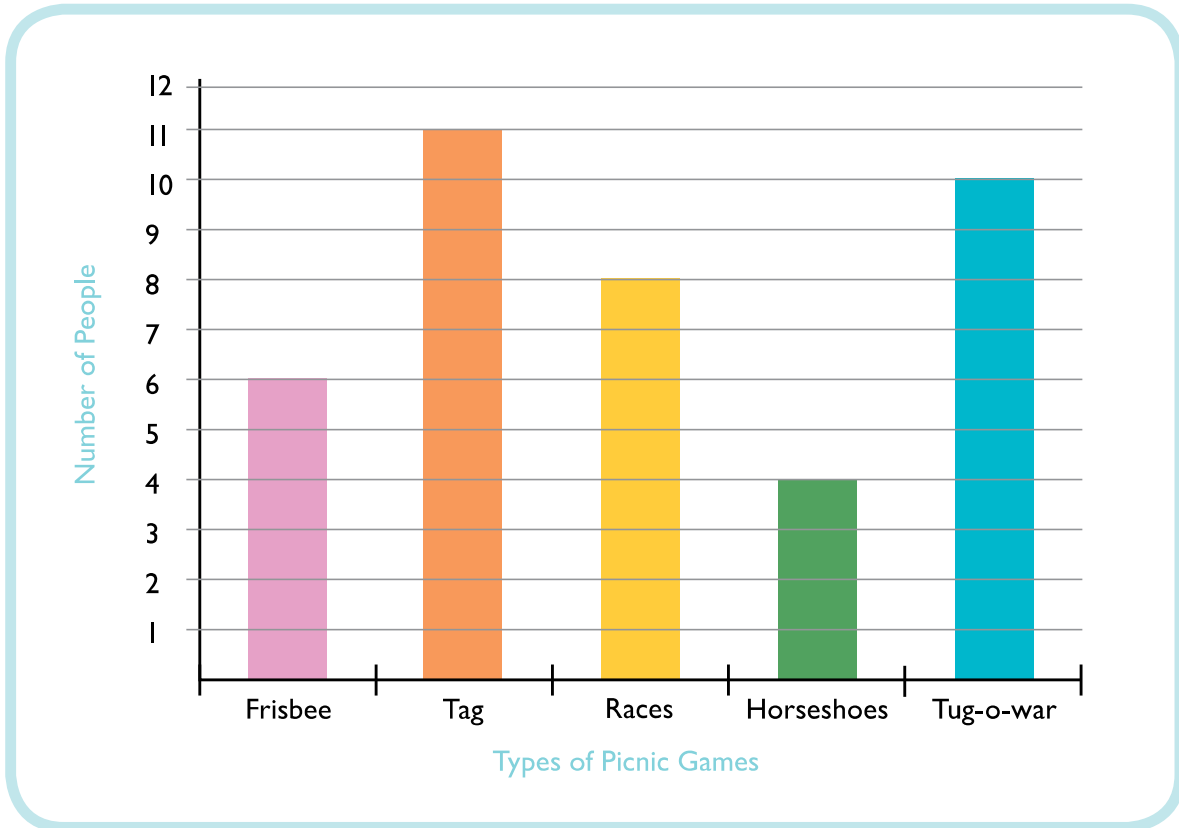




Picnic Bar Graph



Read the bar graph to learn which picnic games were the most popular. Then answer the questions below. Show your work when possible.



1. How many people love races?




2. How many more people chose tug-o-war than frisbee?

3. Add the number of people who love horseshoes and the number of people who love races. What's the difference between that total and the number of people who love tag?

4. How many more people would it take to make frisbee the most loved picnic activity?

5. List the activities in order from most favorite to least favorite.




Favorite BBQ Food

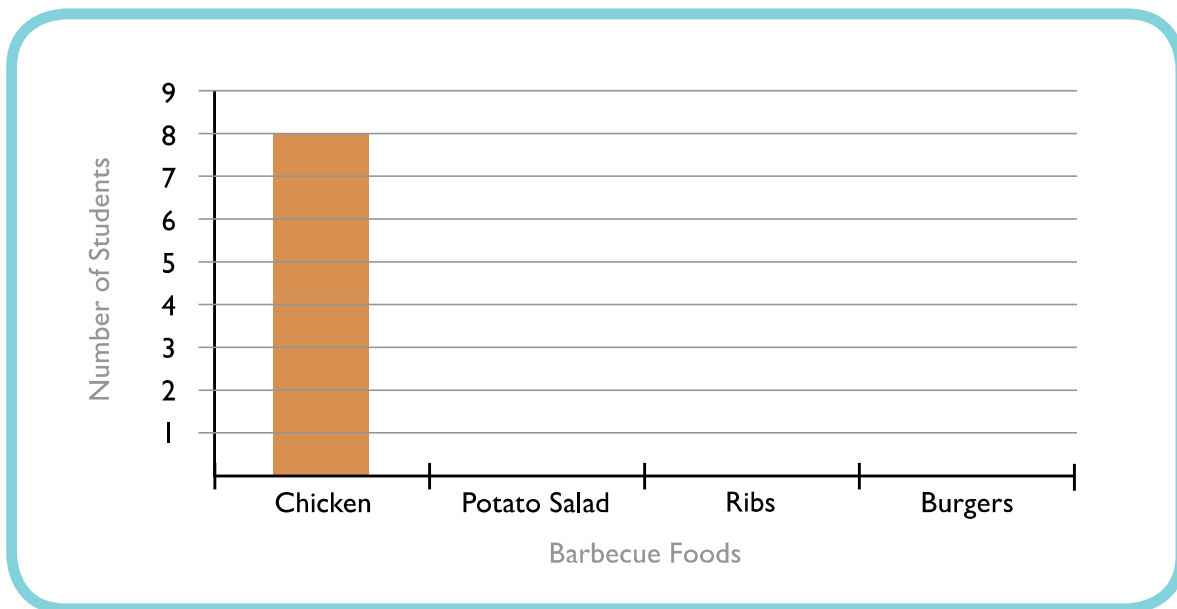


Based on the information given, fill out the chart.
Then complete the graph and answer the questions.

A group of students were asked what their favorite barbecue foods are:




BBQ Food	Students
Chicken	8
Potato Salad	
Ribs	
Burgers	




Mode is the term for the most common response in a set of data.
What is the most popular barbecue food? The food that has the highest number of responses is the **mode**.

Which BBQ food is the least popular?




Favorite Picnic Spots

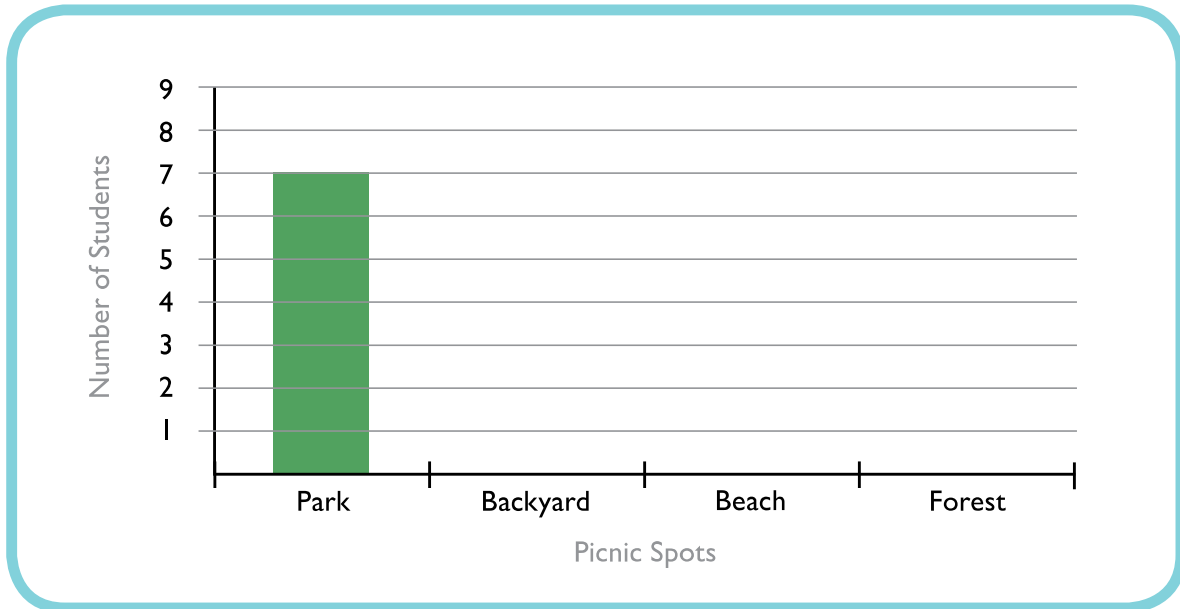


Based on the information given, fill out the chart.
Then complete the graph and answer the questions.

A group of students were asked
what their favorite picnic spots are:



Picnic Spots	Students
Park	7
Backyard	
Beach	
Forest	



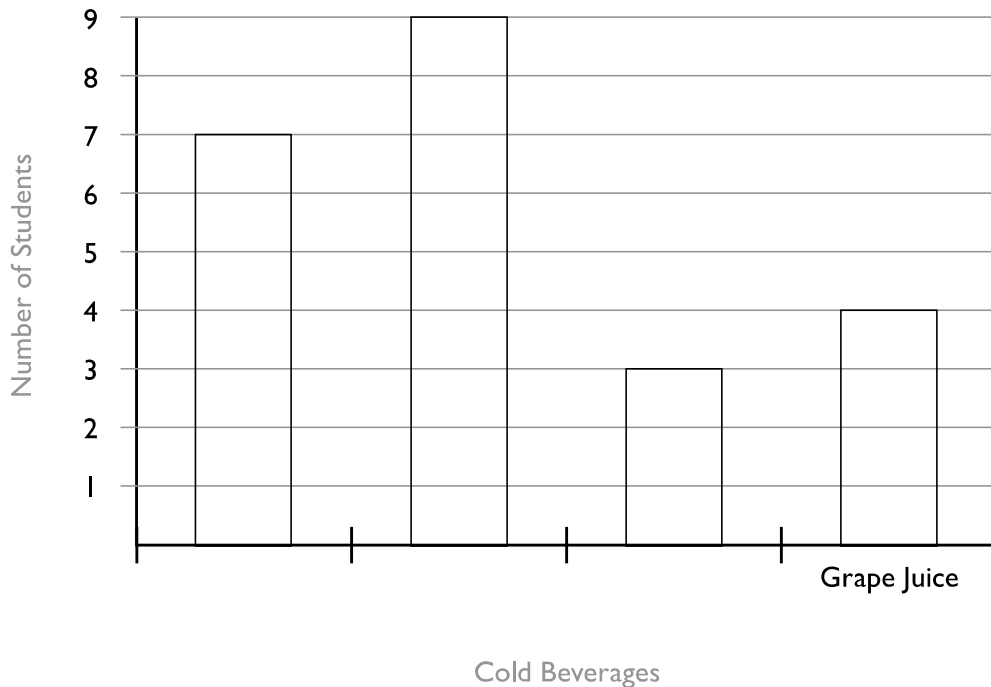
Mode is the term for the most common response in a set of data.
What is the most popular picnic spot? The spot that people picked the most is the **mode**.

Which picnic spot is the least popular?

Cold Drinks



You poll your classmates about their favorite cold beverages.
Now fill in the bar graph using the information below.



1. Seven students like apple juice. Find that bar and label it "Apple Juice."
2. Nine students like lemonade. Find that bar and label it "Lemonade."
3. Three students like iced tea. Find that bar and label it "Iced Tea."
4. Color the most popular drink red.
5. Color the least popular drink blue.
6. How many people like grape juice?