

Tracking Time

2nd
GRADE

January

February

March

Sunday	Monday	Tuesday	Wednesday	Thursday	Friday	Saturday
1	2	3	4	5	6	7
8	9	10	11	12	13	14
15	16	17	18	19	20	21
22	23	24	25			
		31				

December


November

April

May

June

July



October

September

August

Table of Contents

Tracking Time


12 Months
Day & Date #11
Day & Date #12
Day & Date: January
Day & Date: February
Day & Date: March
Day & Date: April
Day & Date: May
Day & Date: June
Day & Date: July
Day & Date: August
Day & Date: September
Day & Date: October
Day & Date: November
Day & Date: December
Tell the Time! 1
Tell the Time! 2
Quarter Till vs. Quarter Past
Draw the Time
A Trip Downtown
A Trip to the Zoo
Elapsed Time: Easy
Time 2 Tell Time 1
Time 2 Tell Time 2
Time 2 Tell Time 3
Time 2 Tell Time 4
Time 2 Tell Time 5

Certificate of Completion


Want more workbooks? Join [Education.com Plus](http://www.education.com/education-plus/) to save time and money.
<http://www.education.com/education-plus/>

The 12 Months

Read this poem to help you remember how many days are in each month.
Then fill in the days below.



Thirty days hath September,
April, June, and November.
All the rest have thirty-one,
except February, it has twenty-eight we find,
unless it's leap year, then it has twenty-nine!



January has _____ days.

February has _____ days.

March has _____ days.

April has _____ days.

May has _____ days.

June has _____ days.

July has _____ days.

August has _____ days.

September has _____ days.

October has _____ days.

November has _____ days.

December has _____ days.



Day & Date #11

Answer the following questions using the calendar below.

1. What day on the calendar is November 24?

2. How many Wednesdays are there in November?

3. Ryan's birthday is on the third Tuesday of November. Write the date.

5. Write the date of the first day of November in 2 different ways.

NOVEMBER 2011

S M T W T F S

		1	2	3	4	5
6	7	8	9	10	11	12
13	14	15	16	17	18	19
20	21	22	23	24	25	26
27	28	29	30			

4. Ann goes to the dentist on the first Friday of the month. Write the date.

Day & Date #12

Answer the following questions using the calendar below.

1. What day on the calendar is December 6?

2. How many Mondays are there in December?

3. Tony goes to the circus on the second Tuesday of December. Write the date.

5. Write the date of the second day of December in 2 different ways.

DECEMBER 2011

S M T W T F S

				1	2	3
4	5	6	7	8	9	10
11	12	13	14	15	16	17
18	19	20	21	22	23	24
25	26	27	28	29	30	31

4. Flora's test is on the fifth Friday of the month. Write the date.

Answer the following questions using the calendar below.

1. What day on the calendar is January 17?

2. How many Fridays are there in January?

3. Dr. Martin Luther King Jr.'s birthday is on the sixteenth day of January. Write the date.

5. Choose a date in January and write it in 2 different ways.

JANUARY 2012

S M T W T F S

1	2	3	4	5	6	7
8	9	10	11	12	13	14
15	16	17	18	19	20	21
22	23	24	25	26	27	28
29	30	31				

4. Danny's party is three weeks from New Year's Day. Write the date.
