

Skip Counting

2nd
GRADE

Can you help
your new friends
with counting and
rounding?



$$87 - 22 = 90 - 20 = 70$$




Table of Contents

Skip Counting

Hundreds Chart
Skip Counting by 2s, 5s and 10s to 100
Counting to 120
Dot-to-Dot Zoo: Count by 2 #1
Dot-to-Dot Zoo: Tapir Count by 2
Dot-to-Dot Zoo: Antelope Count by 2
Dot-to-Dot Zoo: Count by 2 #2
Dot-to-Dot Zoo: Count by 2 #3
Dot-to-Dot Zoo: Count by 3
Connect the Dots by 5! #1
Dot-to-Dot Zoo: Coatimundi Count by 5
Dot-to-Dot Zoo: Count by 5 #1
Connect the Dots by 5! #2
Connect the Dots: Practice Skip Counting by Fours!
Dot-to-Dot Zoo: Count by 5 #2
Dot-to-Dot Zoo: Count by 5 #3
Dot-to-Dot Zoo: Count by 9
Dot-to-Dot Zoo: Count by 5 #4
Connect the Dots: Practice Skip Counting by Tens!
Connect the Dots: Practice Skip Counting by Threes
Dot-to-Dot Zoo: Count by 10
Hopping Through Candy Land
Add, Round, Add #10
Add, Round, Add #1
Rounding and Subtracting #1
Rounding and Subtracting #2
Rounding and Subtracting #3
Speedy Rounding and Subtracting 9
Connect the Dots by 3!
Rock Skipping
Connect the Dots by 6!

Certificate of Completion

Want more workbooks? Join [Education.com Plus](http://www.education.com/education-plus/) to save time and money.
<http://www.education.com/education-plus/>

Hundreds Chart

Use the hundreds chart to see patterns between numbers.

1. Draw a star over the number 32. Now circle the number that is 10 more than 32. Now circle the number that is 10 less than 32. What did you notice?
2. Draw a star over the number 1 on the chart. Now pick any one-digit number: _____. Now add: $1 + \underline{\quad}$ Circle your answer. Keep adding the number you chose, and circle the sums until you run out of room. Do you notice a pattern?
3. Activity: Get together with a partner. Have your partner choose any two-digit number on the chart., Ask him/her to tell you ONE of the digits that is in the number. Can you find all the possible numbers that your partner could be thinking of?

1	2	3	4	5	6	7	8	9	10
11	12	13	14	15	16	17	18	19	20
21	22	23	24	25	26	27	28	29	30
31	32	33	34	35	36	37	38	39	40
41	42	43	44	45	46	47	48	49	50
51	52	53	54	55	56	57	58	59	60
61	62	63	64	65	66	67	68	69	70
71	72	73	74	75	76	77	78	79	80
81	82	83	84	85	86	87	88	89	90
91	92	93	94	95	96	97	98	99	100

name

date

Skip Counting by 2s, 5s and 10s to 100.

Count by 2s and trace the border of the numbers that you land on in red. Count by 5s and trace that you land on in blue. Count by 10s and trace the border of the numbers you land on in green.

Challenge question: If you keep counting on from 100, what's the next number you will trace in red? Blue? Green?

1	2	3	4	5	6	7	8	9	10
11	12	13	14	15	16	17	18	19	20
21	22	23	24	25	26	27	28	29	30
31	32	33	34	35	36	37	38	39	40
41	42	43	44	45	46	47	48	49	50
51	52	53	54	55	56	57	58	59	60
61	62	63	64	65	66	67	68	69	70
71	72	73	74	75	76	77	78	79	80
81	82	83	84	85	86	87	88	89	90
91	92	93	94	95	96	97	98	99	100

name _____

date _____

Counting to 120

Use this chart to help you count past 100! Fill in the missing numbers, starting with 101...

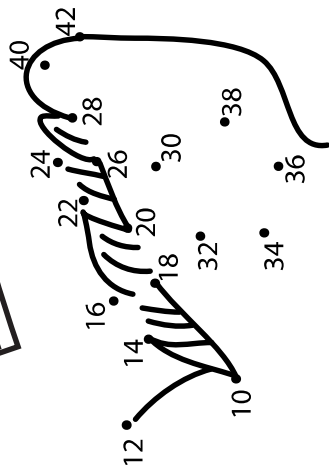
1	2	3	4	5	6	7	8	9	10
11	12	13	14	15	16	17	18	19	20
21	22	23	24	25	26	27	28	29	30
31	32	33	34	35	36	37	38	39	40
41	42	43	44	45	46	47	48	49	50
51	52	53	54	55	56	57	58	59	60
61	62	63	64	65	66	67	68	69	70
71	72	73	74	75	76	77	78	79	80
81	82	83	84	85	86	87	88	89	90
91	92	93	94	95	96	97	98	99	100

DOT-TO-DOT ZOO

What animal is it?
Count by 2s to complete the picture.



DOT-TO-DOT ZOO



•46

•44

•48

What animal is it?
Count by 2's to complete
the picture.



8•

•50



•106



•74



•72

•52



•4



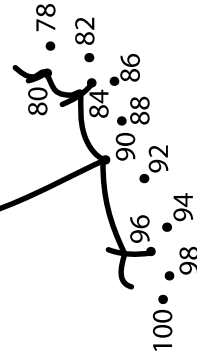
•70



•54

•76

•102



•100

•98

•96

•94

•92

•90

•88

•86

•84

•82

•80

•78

•76

•74

•72

•70

•68

•66

•64

•62

•60

•58

•56

•54

•52

•50