
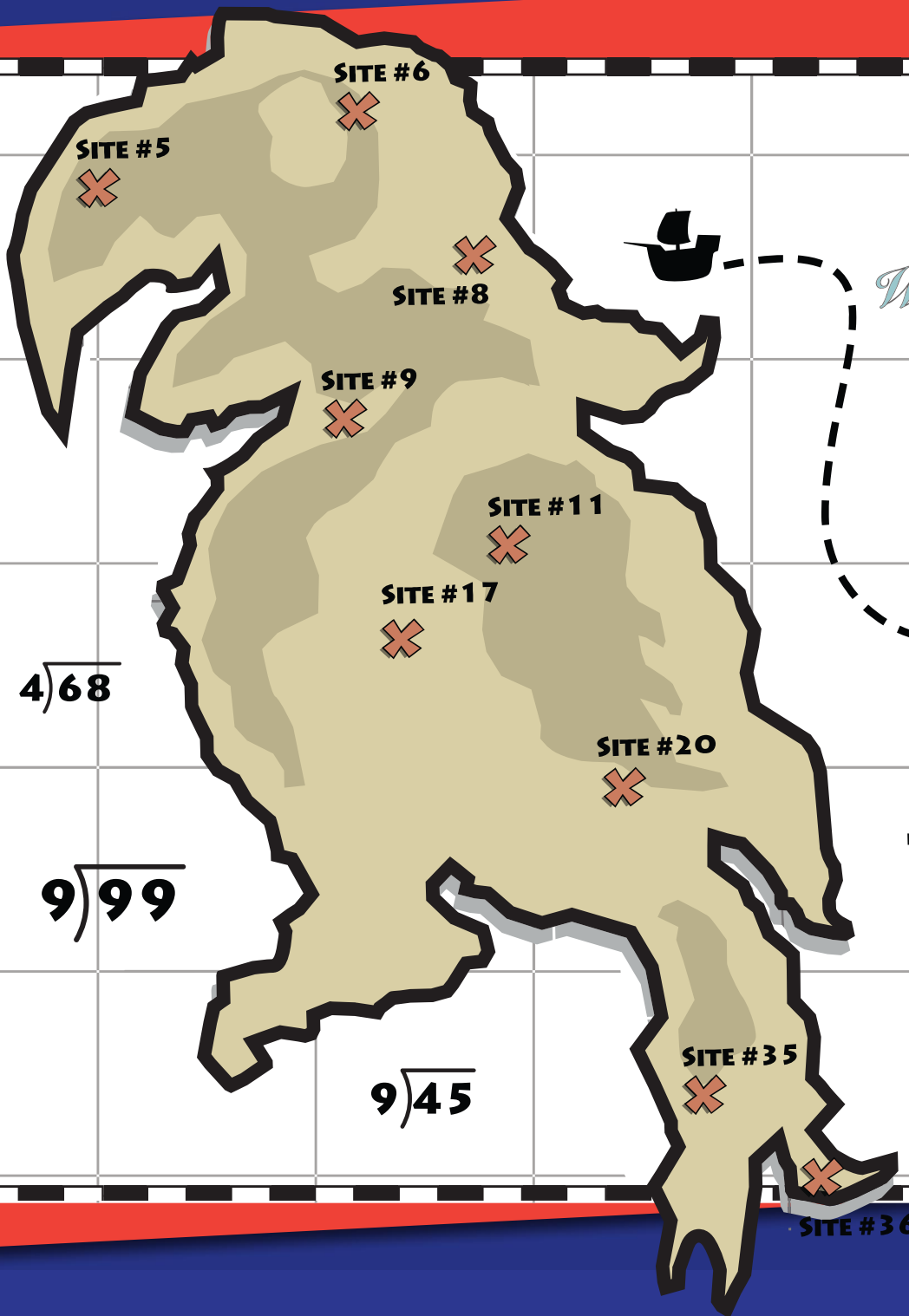


Division Detective

5th
Grade



$$6 \overline{)120}$$

$$7 \overline{)63}$$

$$4 \overline{)140}$$

$$4 \overline{)140}$$

Table of Contents

Division Detective

Divide & Dig: Feather Cap Island *
Divide & Dig: Cannonball Island *
Divide & Dig: Black Beak Island *
Divide & Dig: The Island of Riches *
Divide & Dig: Lookout Island *
Divide & Dig: Sunken Anchor Island *
Divide & Dig: Jagged Diamond Island *
Divide & Dig: The Forbidden Island *
Divide & Dig: Enchantment Island *
Division Detective: West Coast USA *
Division Detective: East Coast USA *
Division Detective: Central USA *
Dividing Decimals Math Riddle *

Certificate of Completion

Answer Sheets

** Has an Answer Sheet*

Want more workbooks? Join Education.com Plus to save time and money.
<http://www.education.com/education-plus/>

DIVIDE & DIG #1

TREASURE HUNT ON FEATHER CAP ISLAND

You and your pirate crew have arrived on an island that is known to have buried treasure. Someone is trying to fool you by placing decoy sites on the treasure map. To find the real site, solve the division problems. Then, cross out the sites with the numbers that correspond to each answer. The last site left contains the hidden treasure!

$$6 \overline{)120}$$

$$6 \overline{)24}$$

$$10 \overline{)120}$$

$$7 \overline{)147}$$

$$5 \overline{)55}$$

$$4 \overline{)64}$$

$$9 \overline{)117}$$

$$5 \overline{)15}$$



FEATHER CAP ISLAND

DIVIDE & DIG #2

TREASURE HUNT ON CANNONBALL ISLAND

You and your pirate crew have arrived on an island that is known to have buried treasure. Someone is trying to fool you by placing decoy sites on the treasure map. To find the real site, solve the division problems. Then, cross out the sites with the numbers that correspond to each answer. The last site left contains the hidden treasure!

$$7 \overline{)133}$$

$$2 \overline{)84}$$

$$12 \overline{)144}$$

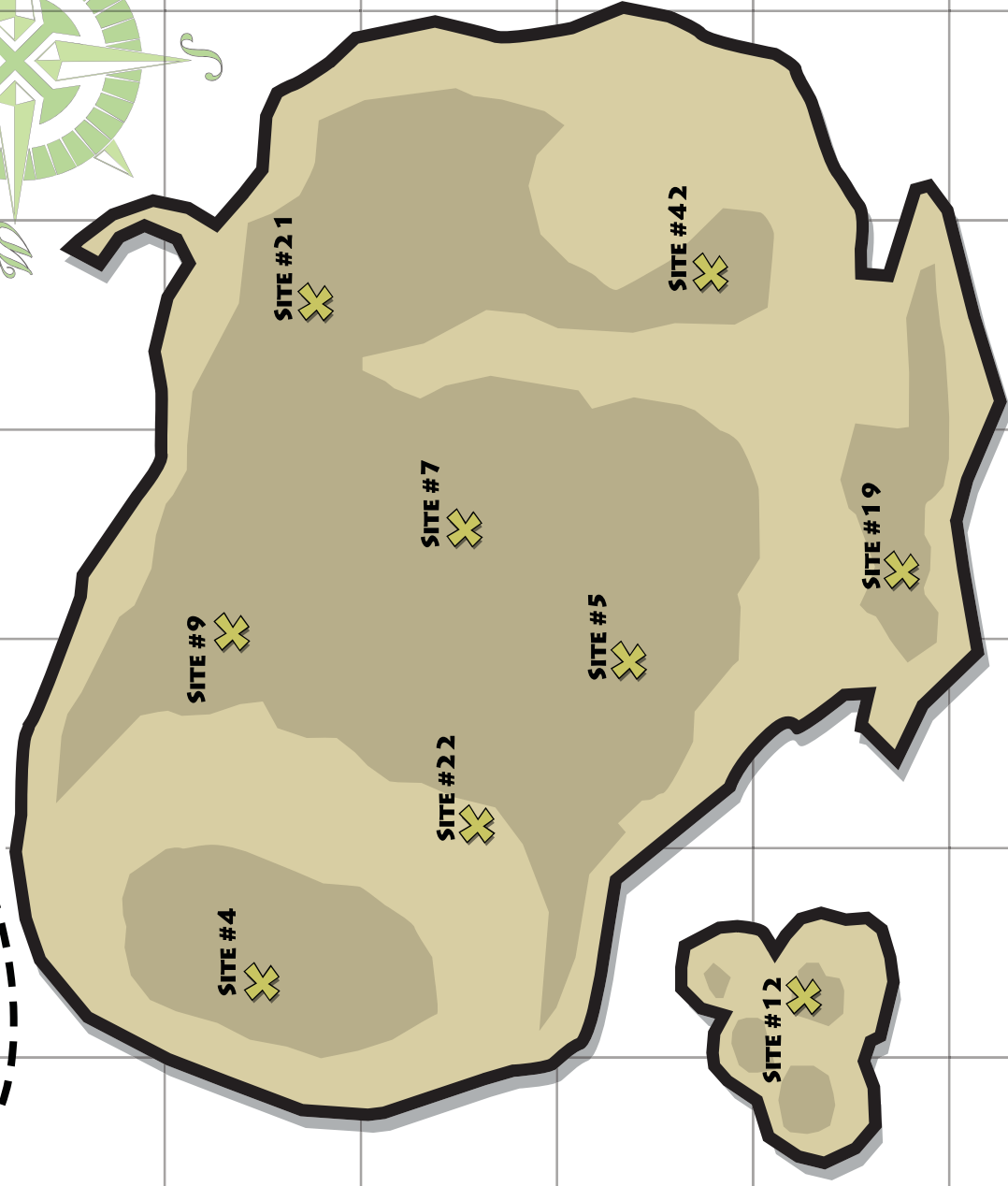

$$2 \overline{)44}$$

$$9 \overline{)45}$$

$$2 \overline{)42}$$

$$3 \overline{)21}$$

$$4 \overline{)16}$$



CANNONBALL ISLAND

DIVIDE & DIG #4

TREASURE HUNT ON THE ISLAND OF RICHES

You and your pirate crew have arrived on an island that is known to have buried treasure. Someone is trying to fool you by placing decoy sites on the treasure map. To find the real site, solve the division problems. Then, cross out the sites with the numbers that correspond to each answer. The last site left contains the hidden treasure!

$$4 \overline{)108}$$

$$4 \overline{)56}$$

$$6 \overline{)108}$$


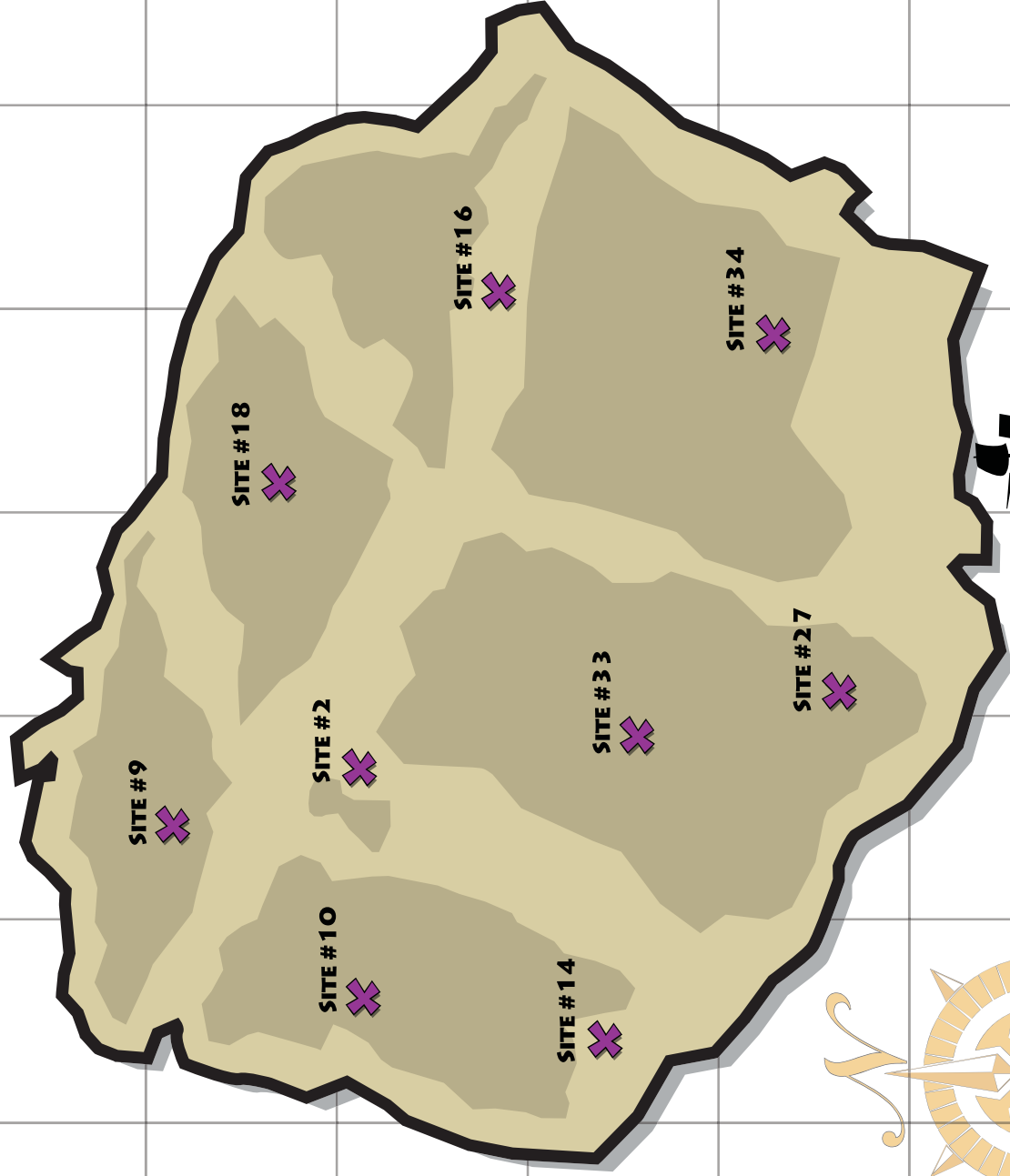
$$7 \overline{)63}$$

$$2 \overline{)68}$$

$$6 \overline{)12}$$

$$6 \overline{)96}$$

$$9 \overline{)90}$$



THE ISLAND OF RICHES